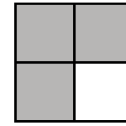


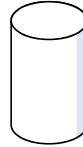
Sample Lesson



1. What part of the square is shaded?

2. $536 - 312 = ?$


3. $12 + 24 + 16 = ?$



4. Write the name of the shape.

5. Chris had 24 pepper plants. He gave two plants to his neighbor. Then he got five more. How many pepper plants does Chris have now?

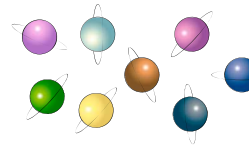
6. What time is shown?



7. $642 + 353 = ?$

8. Fill in the sign to make this sentence true. $488 \bigcirc 502$

9. Look at the picture. Is the number of planets even or odd?




10. Write the number using base-ten numerals. 57 tens

11. Which of these is the best tool for measuring lines on your art paper?

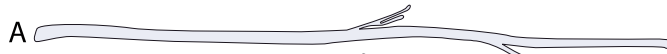
- A) meter stick B) tape measure C) ruler D) air pump

12. Count the objects in the array. Write two addition statements to show the sum.



13. Write your answers in centimeters.

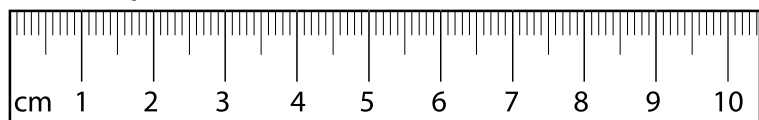
• How long is A?



• How long is B?



• How much longer is A than B?



14. How much money is 8 quarters?

15. Which class is the longest? How long is it?

What time does math class start?

Class Schedule	
8:30 - 9:00	Spelling
9:00 - 10:00	Reading
10:00 - 10:30	Math
10:30 - 11:00	English

<p>1. 2.G.3</p>	<p>2. 2.NBT.7</p>	<p>3. 2.NBT.6</p>
<p>4. 2.G.1</p>	<p>5. 2.OA.1</p>	<p>6. 2.MD.7</p>
<p>7. 2.NBT.7</p>	<p>8. 2.NBT.4</p>	<p>9. 2.OA.3</p>
<p>10. 2.NBT.3</p>	<p>11. 2.MD.1</p>	<p>12. 2.OA.4</p>
<p>13. 2.MD.4</p>	<p>14. 2.MD.8</p>	<p>15. 2.MD.10</p>