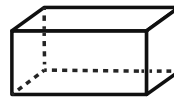


Sample Lesson

1. Find the sum. $6 + 1 = ?$

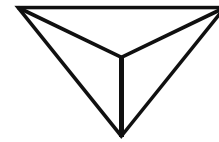
2. 39 ? 74

3. Write the name of the shape in the answer box.



rectangular prism
cone

4. How many equal parts are there?




5. Find the difference. $7 - 3 = ?$

6. I have 9 tens and 5 ones. What number am I?

7. Write the missing addend. $7 + \boxed{?} = 15$

8. Write an equal sign.

9. Which snack is liked best?



10. How many like ice cream?

1.	2.
3.	4.
5.	6.
7.	8.
9.	10.